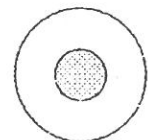


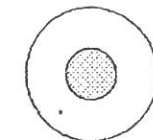
14.2

## 2. Elektronskal

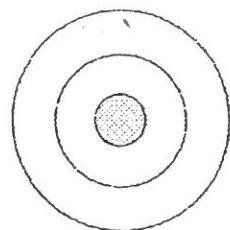
A Elektronerna rör sig i bestämda områden runt kärnan, så kallade elektronskal. Skriv in atomkärnans laddning och rita in hur elektronerna är fördelade i de olika elektronskalen i bilden nedan.



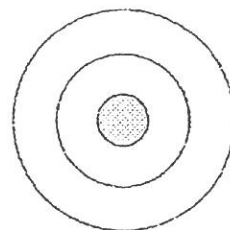
Väte



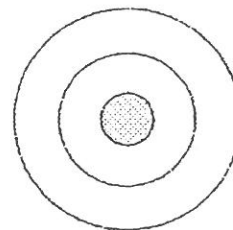
Helium



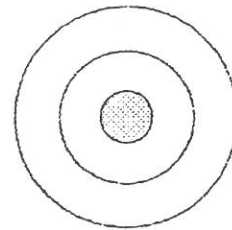
Litium



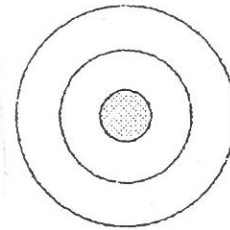
Beryllium



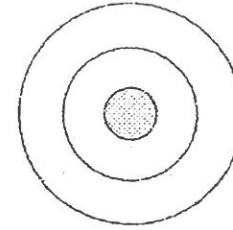
Bor



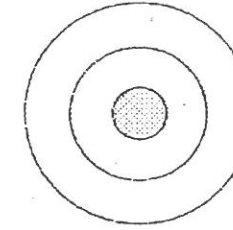
Kol



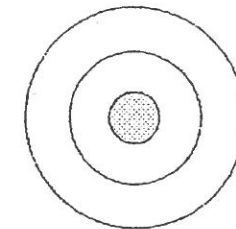
Kväve



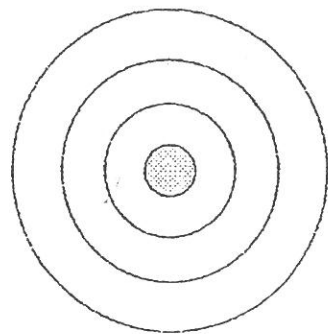
Syre



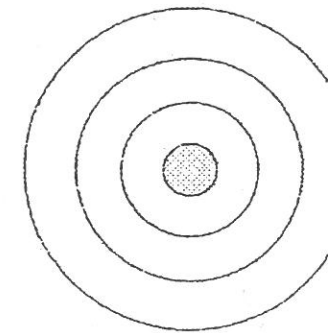
Fluor



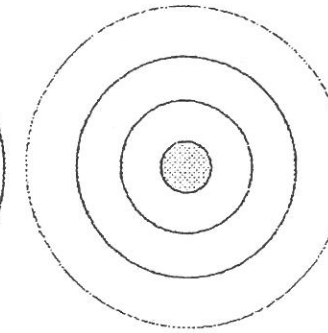
Neon



Natrium



Klor



Argon