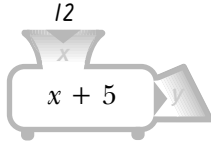


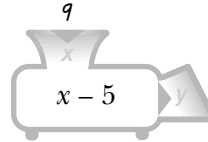
Funktionsmaskiner I

1 Vilket värde kommer ur funktionen?

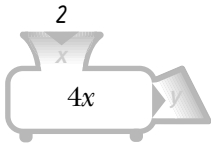
a)



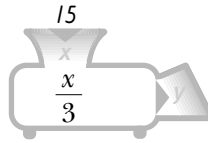
b)



c)

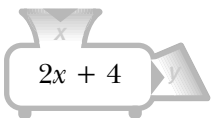


d)

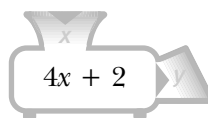


2 Vilket är funktionsvärdet om x är 8 och funktionsmaskinen visar

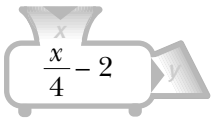
a)



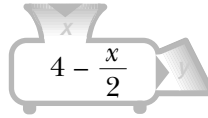
b)



c)

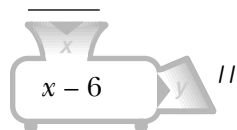


d)

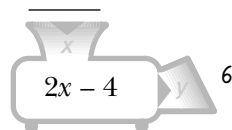


3 Vilket tal har man stoppat in i funktionsmaskinen?

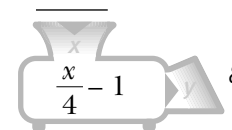
a)



b)

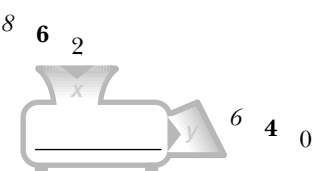


c)

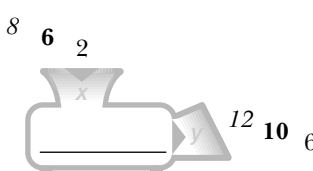


4 Vilken är funktionen?

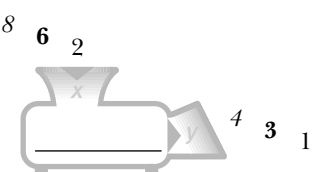
a)



b)



c)



d)

