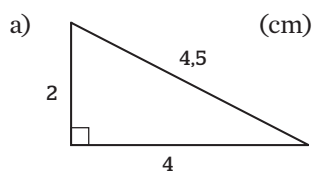


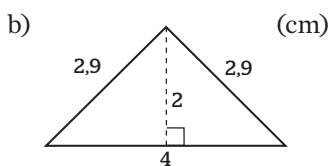
Övningsblad 3.8

Area av trianglar och månghörningar

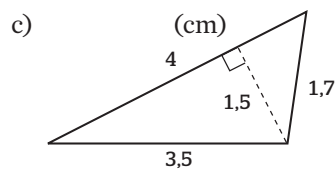
1 Beräkna triangelns area.



$A =$ _____

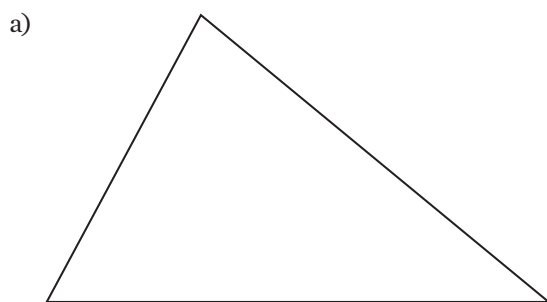


$A =$ _____

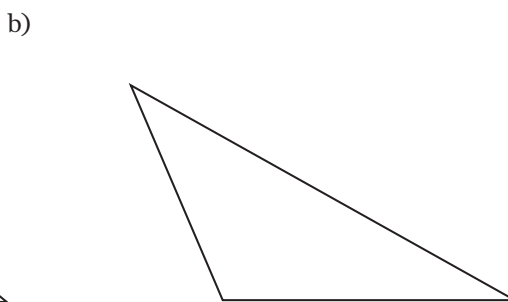


$A =$ _____

2 Markera bas och höjd i triangeln och beräkna arean.

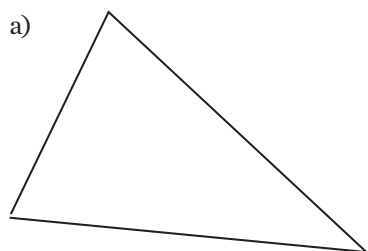


$A =$ _____

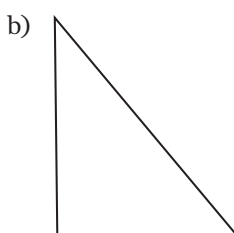


$A =$ _____

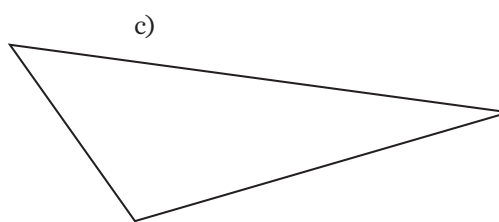
3 Mät i figuren och beräkna arean.



$A =$ _____




$A =$ _____



$A =$ _____

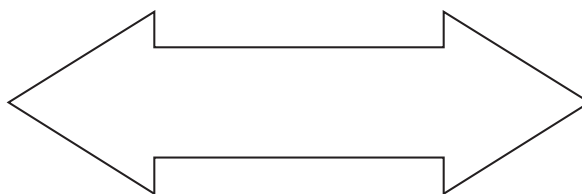
Dela in figuren i mindre figurer, mät och beräkna arean.

4 a)



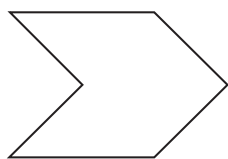
$A =$ _____

b)



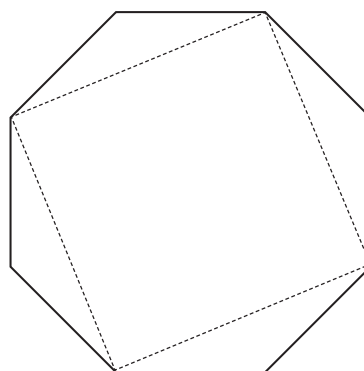
$A =$ _____

5 a)




$A =$ _____

b)



$A =$ _____

6



$A =$ _____